



1. Find the perimeter of the following:

(a)



.....

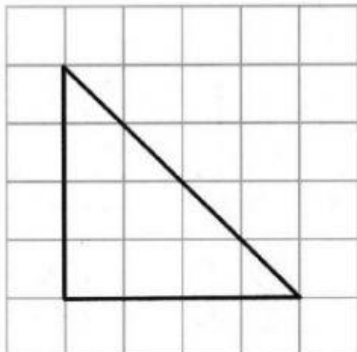
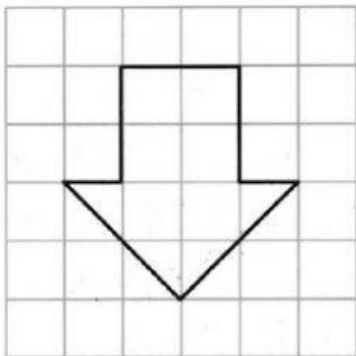
(b)



.....

2. Find the area of the following figures?

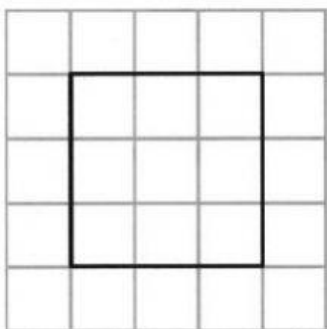
(a)



(b)

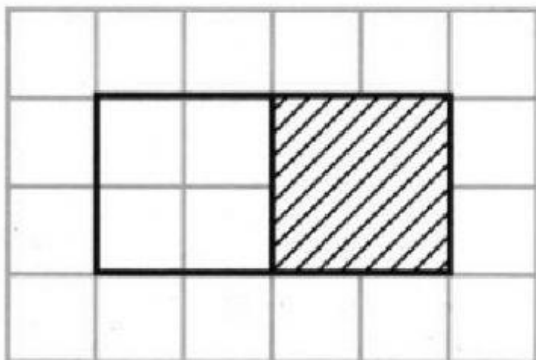
KENDRIYA VIDYALAYA ONGC ANKLESHWAR
CLASS – 5 A & B WORKSHEET
HOW MANY SQUARES?

(c)



4. What is the area of the shaded part?

(a)



(b)

