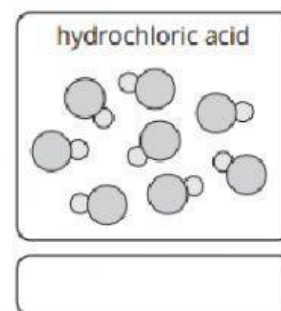
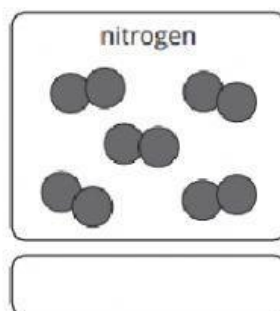
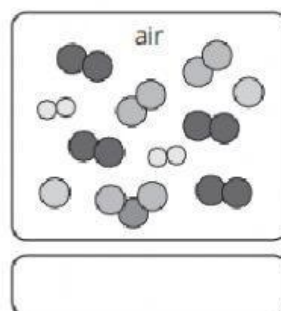
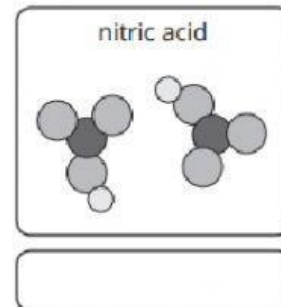
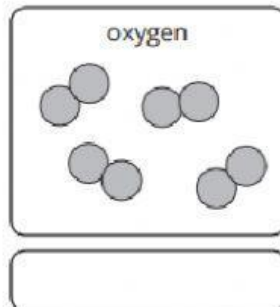
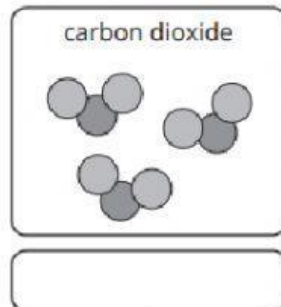


Element, Compound or Mixture

1. State whether each substance below is an element, a compound or a mixture.



2. Complete the definitions using words from the box below.

An **element** is made up of _____ type of atom.

A **compound** is made up of _____ different atoms,
_____ together.

A **mixture** is made up of _____ different atoms,
_____ together.

two or more two or more only one not chemically joined chemically joined