





11



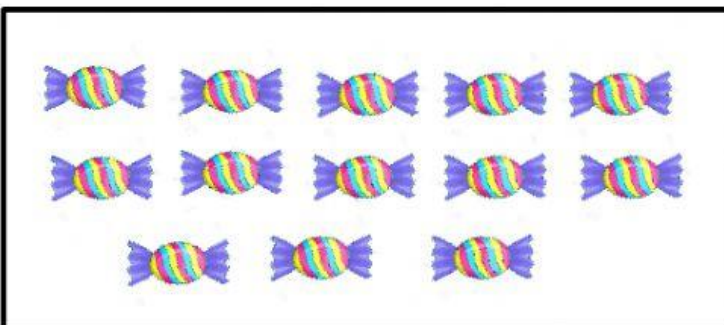
12



13



14



15

COMPLETA EL NUMERO QUE FALTA

	13	
	9	
	11	
	8	
	3	

1		3
6		8
11		13
13		15
5		7

SUMA

$7 + 6 = \square$

$6 + 9 = \square$

$5 + 2 = \square$

$3 + 1 = \square$

$9 + 5 = \square$

$4 + 5 = \square$

$8 + 7 = \square$

$2 + 4 = \square$

$5 + 5 = \square$

$3 + 3 = \square$