




I am in grade 2: _____ Starter activity


Today is _____ the _____


Subtraction strategies

Count

How many are left?
 $5 - 2 = \square$

Draw the problem.
 $5 - 2 = \square$ 

Count back

 $7 - 4 = \square$

Find the difference.

 $5 - 2 = \square$

Count on  9

subtraction الطرح

- subtract اطرح 
- minus ناقص
- leave أترك
- less أقل
- take away حد
- difference between فرق بين



Fill in the blanks.

Complete the equations.

$14 - 7 = 7$

$14 - 5 = 9$

$14 - 3 = 11$

$13 - 7 = \square$

$13 - 5 = \square$

$13 - 3 = \square$

$12 - 7 = \square$

$12 - 5 = \square$

$12 - 3 = \square$

$11 - 7 = \square$

$11 - 5 = \square$

$11 - 3 = \square$