



CUENTA Y SUMA




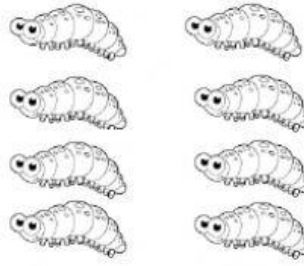
$$\square + \square = \square$$




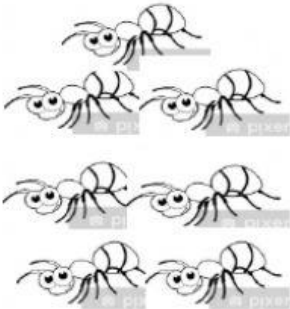
$$\square + \square = \square$$




$$\square + \square = \square$$



$$\square + \square = \square$$



$$\square + \square = \square$$



$$\square + \square = \square$$