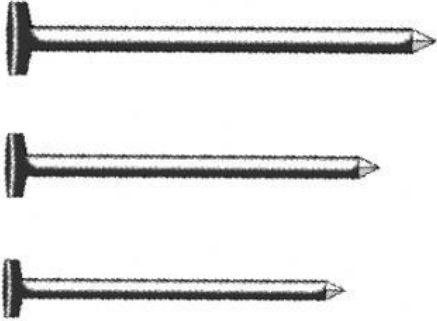



## Longest and Shortest

A. When we compare more than two items, we use 'longest' and 'shortest'.


1. Select the longest iron nail.




2. Select the shortest cotton bud.




3. Select the shortest radish.



4. Select the longest pencil.



5. Select the longest key.



6. Select the shortest lollipop.



## Comparing Height

Compare the following animals in terms of height and answer the questions!



1. Who is the shortest? = \_\_\_\_\_
2. Who is the tallest? = \_\_\_\_\_
3. Tiger is \_\_\_\_\_ than Mouse. (taller/shorter)
4. Giraffe is \_\_\_\_\_ than Hippo. (taller/shorter)
5. Tiger is \_\_\_\_\_ than Giraffe. (taller/shorter)
6. Hippo is \_\_\_\_\_ than Giraffe. (taller/shorter)
7. Giraffe is \_\_\_\_\_ than Mouse. (taller/shorter)
8. Mouse is \_\_\_\_\_ than Tiger. (taller/shorter)
9. Who is taller than Mouse but shorter than Hippo?  
= \_\_\_\_\_
10. Who is shorter than Giraffe and shorter than Tiger?  
= \_\_\_\_\_