













## REVIEW SCIENCE I

Bismillaahirrohmaanirrohiim

Answer the questions below correctly.

1. Classify these things into light sources and non-light sources.

				
lightning	paper	mirror	sun	lighthouse
				
magnet	lantern	moon	firefly	water

Light sources	Non-light sources
1.	1.
2.	2.
3.	3.
4.	4.
5.	5.

2. Use the helping words to describe the pictures and complete the sentences.

No light	Some light	some	no	A lot of light
----------	------------	------	----	----------------

a.



.....



b.



c.



3. In which place will you not be able to see anything?

The place with \_\_\_\_\_ light.

4. In which place will you find it hard to see clearly?

The place with \_\_\_\_\_ light.

5. Match the things to the shadows they can form.









6. Where you can find rocks? We can find rocks in the ....

Mountain, seashore

Mountain, soil

Cave, soil

7. Name rocks A, B and C by drop and drag the name of rocks. See the helping words.

granite

limestone

sandstone



A

(.....)



B

(.....)



C

(.....)

Rock	Description
A	It contains fossils
B	It has layers
C	It has large grains

8. Classify the things in the picture in this table.







Light Sources	Non-light sources

9. When there is no light, there is \_\_\_\_\_ (total/half) darkness.

10. We cannot see when \_\_\_\_\_ (no/there is) light enters our eyes.

11. A shadow is formed when light is \_\_\_\_\_. (blocked/turn on)

12. There are four types of rocks. What are they?

- \_\_\_\_\_
- \_\_\_\_\_
- \_\_\_\_\_
- \_\_\_\_\_

**Alhamdulillahirobbil'alamiin**