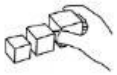


## MATEMÁTICAS CON MICKEY



## ORDENA LOS NÚMEROS

1	2	3	4	5	6	7	8	9	10
---	---	---	---	---	---	---	---	---	----

1			4		6		8		10
---	--	--	---	--	---	--	---	--	----

	2			5		7		9	
--	---	--	--	---	--	---	--	---	--

2 7 3 1 8 3 6  
9 5 10 4



# CUENTA LOS MICKEYS

2	7	4

1	3	5

2	5	6







2	3	7

8	6	5

2	4	3



SIGUE LA SERIE:





¡ BUEN TRABAJO!