


LONGER AND SHORTER

When we compare two items, we use 'longer' and 'shorter'. Select the correct item below.

1. Which is longer?



2. Which is shorter?



3. Which is shorter?



4. Which is longer?



5. Which is longer?



6. Which is shorter?



SHORTER, TALLER, LONGER, HIGHER AND LOWER

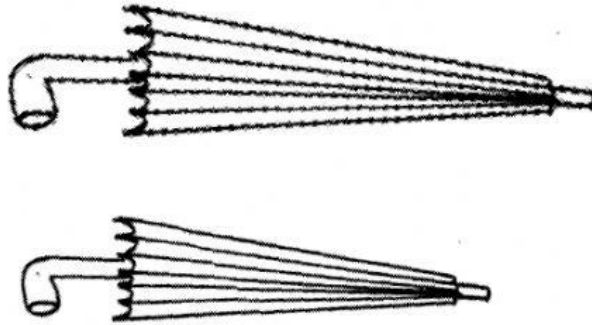
1. Select the shorter object




2. Select the taller object.




3. Select the shorter object



4. Select the longer object.



5. Select the higher object.



6. Select the lower object.

