
 <b>ICM</b>   INSAN CENDEKIA MADANI	<b>ASSESSMENT</b> <b>Unit 11 Symmetry</b>	Name :	
		Class :	
		Teacher :	
		Date :	
✓ Individual guided practice ✓ Independent/ fluency practice		Marks: <b>8</b>	Score:


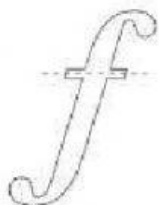
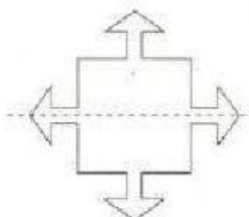

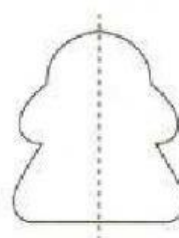
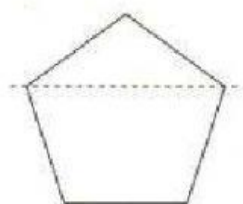
Read the instruction below and answer all questions!



## Worksheet 1

### Lines of Symmetry

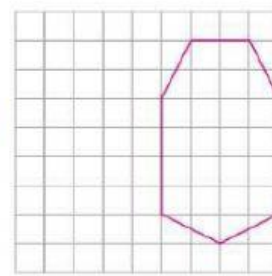
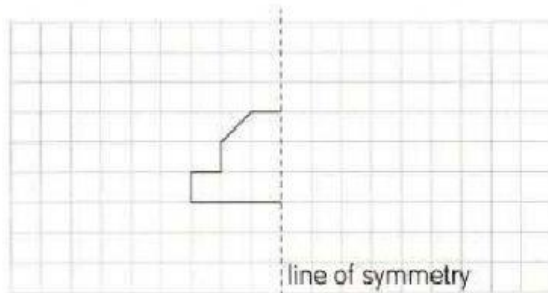
- 1 Look at these shapes.  
Give a tick all the shapes that have a correct line of symmetry.



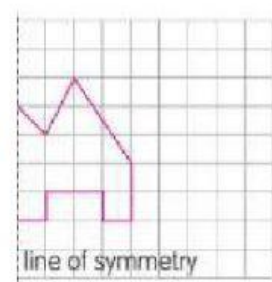
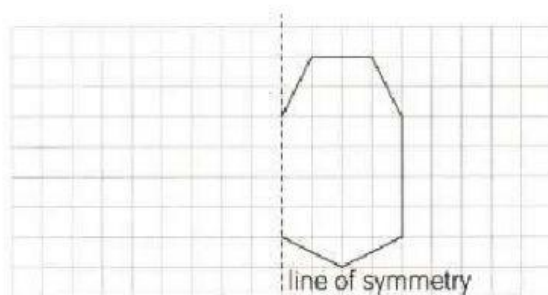
## Completing Symmetrical Shapes

1 Match each symmetrical shape.

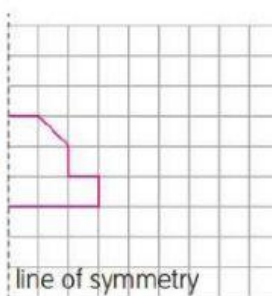
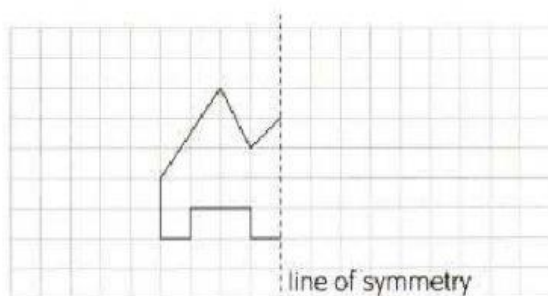
(a)



(b)



(c)



# Worksheet 3

## Drawing Reflections of Shapes

- 1 Drag and drop the reflection of each shape in the mirror line.

