



Count, add and write the correct answer.

$$1 \text{ burger} + 2 \text{ burgers} = \square$$



$$2 \text{ burgers} + 2 \text{ burgers} = \square$$

Count, add and write the correct answer.

 +  =

 +  =

Count, add and write the correct answer.

 $+$  $=$

 $+$  $=$