





REVISION – STRAND 4 – HANDLING DATA GRADE –VI MATHEMATICS

I. Complete the frequency column.

Food Items	Tally Marks	Frequency
 Burger		
 Pizza		
 Fried Chicken		
 Hot Dog		

II. Look at the numbers on the spinner and choose the correct probability term.



- The probability of getting a number 6 _____
- The probability of getting a number 2 _____
- The probability of getting an even number _____
- The probability of getting a number _____