

REVISION – STRAND 1 - NUMBERS

GRADE –VI MATHEMATICS

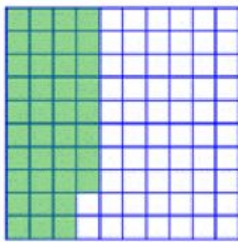
1. The temperature in London in the morning was -9°C and in afternoon, it increased to 7°C . what is the temperature change?

2. State whether the result of the combination 257×56 is odd or even. _____

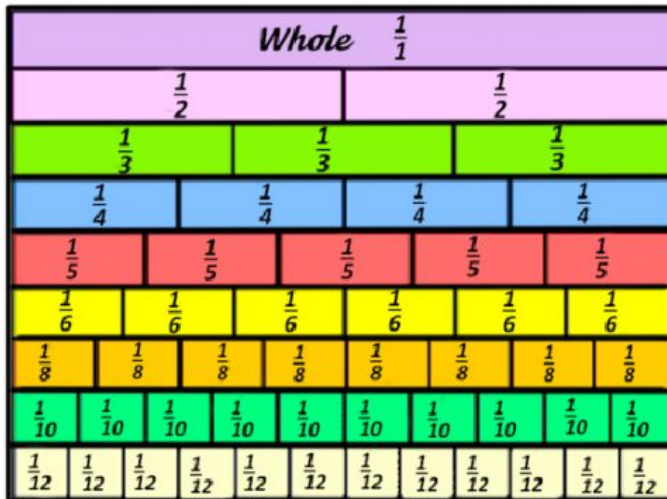
3. Express the shaded part of the 100 square grids as

a. Fraction: _____

b. Percentage: _____



4. What is 50% of 6700g? _____
5. Find two equivalent fractions of $\frac{1}{2}$ using the fraction wall.



Equivalent fractions =

--	--

=

--	--

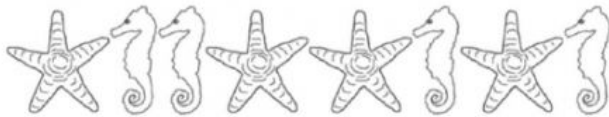
6. Write each fraction in correct set.

$$2\frac{3}{5}, \quad \frac{7}{3}, \quad \frac{2}{7}, \quad 6\frac{5}{11}$$

Mixed Numbers = _____

Improper Fractions = _____

7. Observe the pattern given below and answer the questions.



1. What proportion of the sea creatures are star fishes? _____

2. What is the ratio of star fish to sea horse? _____