



SARASAS WITAED BURAPHA SCHOOL

Worksheet Bilingual Program Semester 1/2021

Name: _____






Grade: _____

Subject: Science

Student Number: _____

Force: A Push or Pull

Directions: Tell whether the pictures are a “push” or “pull”. Click on your answer.

	<input type="radio"/> push	<input type="radio"/> pull
	<input type="radio"/> push	<input type="radio"/> pull
	<input type="radio"/> push	<input type="radio"/> pull
	<input type="radio"/> push	<input type="radio"/> pull
	<input type="radio"/> push	<input type="radio"/> pull