



Student name: _____

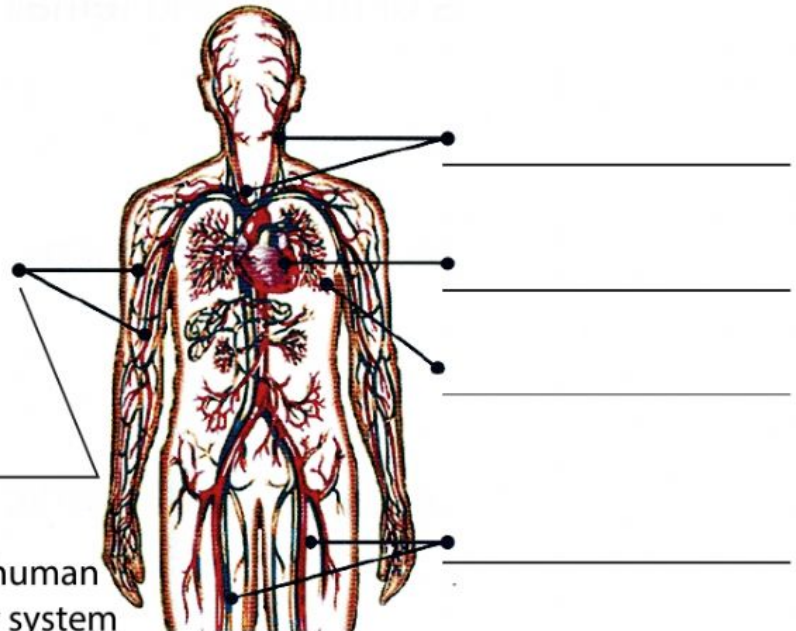
Student number: _____

Date: ____/____/____

Chapter 1 (pg 8 - 12)

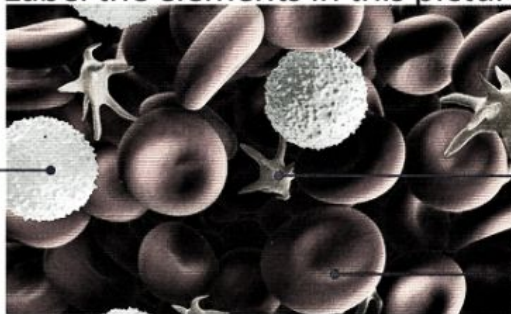
Respiratory system

The circulatory system
is the system that delivers
_____ and
_____ to all the cells
in our body and removes
waste materials from our body



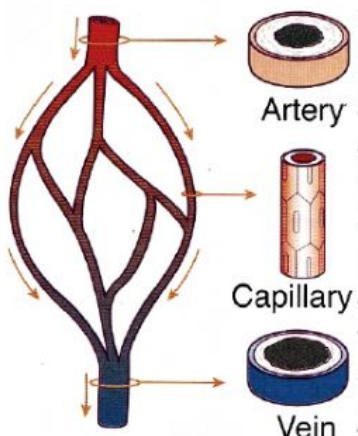
Label the human
circulatory system

Label the elements in this picture.



Blood consists of a fluid called _____,
blood cells and _____. There are
_____ types of blood cells:

1. _____
2. _____



Artery

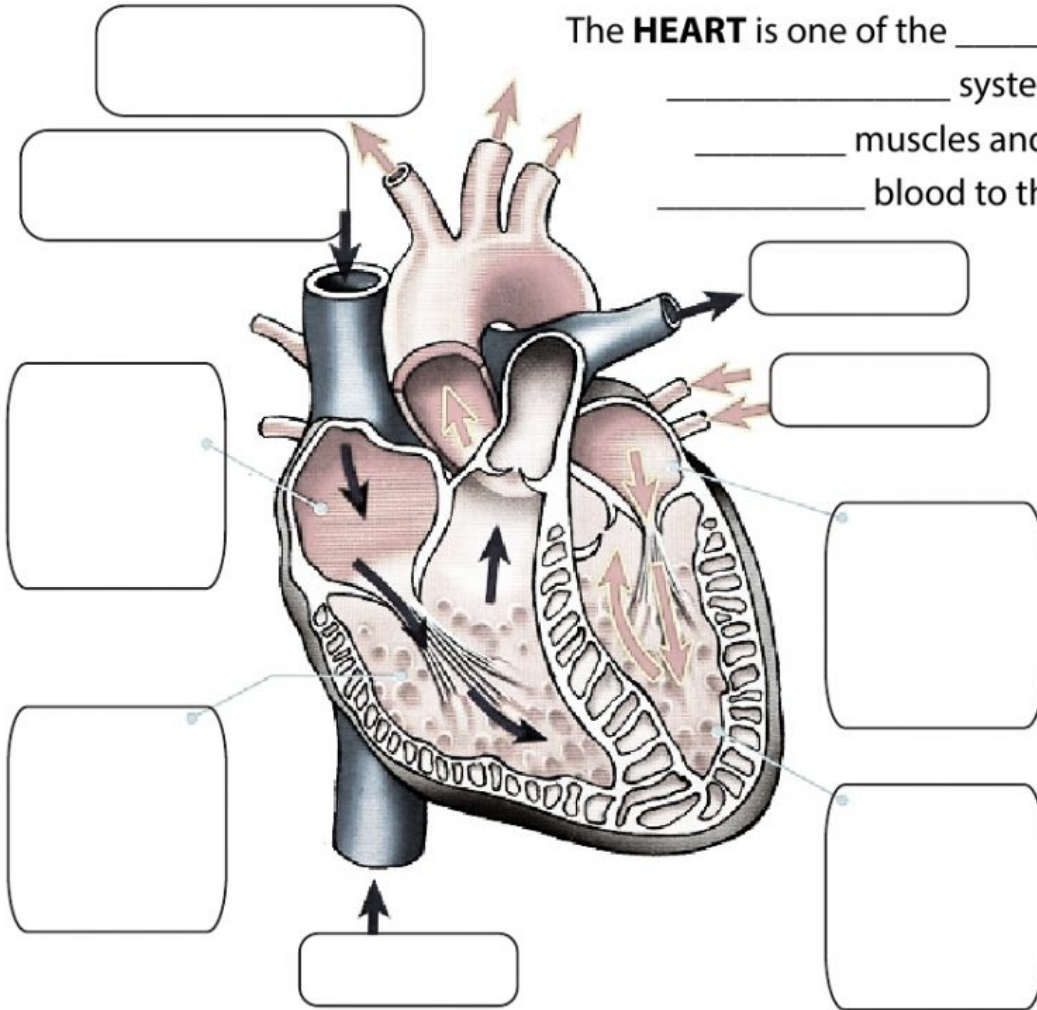
Capillary

Vein

Blood vessels can be categorised into three types:

1. _____
What does it do?
2. _____
Describe it.
3. _____
What does it do?

The **HEART** is one of the _____ organs of the _____ system. It is composed of _____ muscles and it is responsible for _____ blood to the _____ body.



Briefly write the key points of caring for your circulatory system:

1. _____
2. _____
3. _____
4. _____
5. _____

Name the blood vessels shown.



Write the sequence of blood flow in the human circulatory system.

