

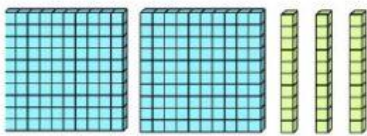


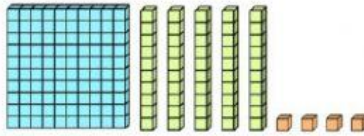
G1 Bookworms 3rd Quarter Test Section 2: Mathematics




1. Addition and numbers (18 points)

How many?







Write the number that is missing:

51, 61, 71, _____, _____.

150, 145, 140, _____, 130, _____, 120.

Add

$32 + 8 = \underline{\hspace{2cm}}$

$41 + 9 = \underline{\hspace{2cm}}$

$36 + 20 = \underline{\hspace{2cm}}$

$27 + 25 = \underline{\hspace{2cm}}$

$75 + 15 = \underline{\hspace{2cm}}$

$45 + 30 = \underline{\hspace{2cm}}$

$90 + 25 = \underline{\hspace{2cm}}$

$100 + 10 = \underline{\hspace{2cm}}$

Peter spent the weekend on a farm. He counted 3 pigs, 13 hens, 10 horses, 6 turkeys and 1 dog there. How many animals did he count?

Write the numbers:

231: _____

600: _____

123: _____

