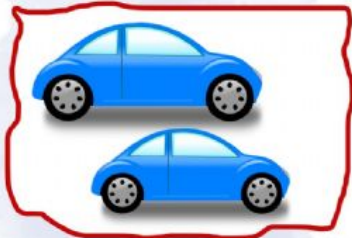


Addition


Count the objects in each box. Add the number of objects in both boxes and write the total in the last box.




+



=



+



=



+



=

