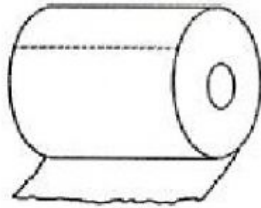


Objects and Magnets

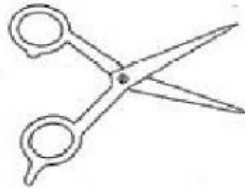
Date: _____



Colour the objects that can be attracted to magnets.



toilet paper



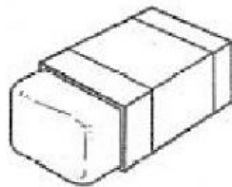
scissors



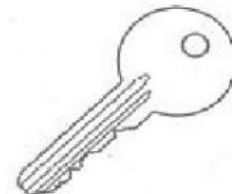
matchstick



thumbtack



rubber



iron key

Complete the sentences below.

1. Magnets can attract _____, _____
and _____.
2. Magnets cannot attract _____,
_____ and _____.
3. _____ can attract certain types of object.