

# Sarasas Witaed Ekkachai School


















Name

Grade:

No.

Fill in the correct correct answer of the following question in the given Pictograph.

## Number of books sold in 5 days

Monday	  
Tuesday	
Wednesday	     
Thursday	  
Friday	   

6 books

Wednesday

Tuesday

3 books

17 books

Question:

1. How many books was sold in Thursday?

2. What day has a least book to sold?

3. What day has the greatest book to sold?

4. How many books was sold in Wednesday?

5. How many books was sold in 5 days?