



CLASS : MONT II

TERM 1

21.09.2021


NAME:

MATHS

MARKS:10


FUN WITH LINES AND SHAPES

A. Match the shapes :





Identify the shapes and answer the questions.





1. How many squares can you see?

2. How many rectangles can you see?

3. Can you see any circles?



CHOOSE THE BIG :





CHOOSE WHICH HAS MORE :



CHOOSE WHICH IS LIGHT



CHOOSE THE OBJECT THAT IS THICK



CHOOSE THE TALLEST

