





Q1. Count the tally marks and write the number.

a) \_\_\_\_\_ 

b) \_\_\_\_\_ 

c) \_\_\_\_\_ 

Q2. Read the tally chart on the survey done on the favorite breakfast and answer the questions that follow.

eggs	
muffins	
cereals	
doughnuts	

a) Which is the most favorite breakfast?

b) How many kids like to have eggs for breakfast?

c) How many more are muffins favorite than eggs?

d) How many kids have participated in the survey?