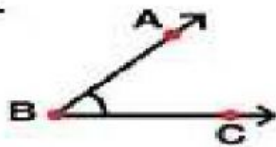


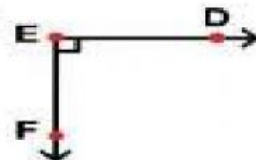


1. Name the given angles

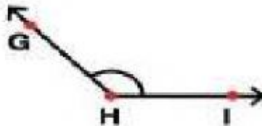
1.



2.



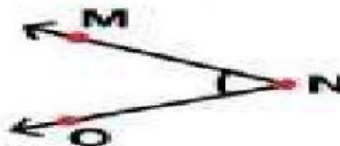
3.



4.



5.



SRI VIDYANIKETAN PUBLIC SCHOOL

2. Choose the correct answer

a. $90^{\circ} =$ _____

b. $0^{\circ} =$ _____

c. $360^{\circ} =$ _____

d. $180^{\circ} =$ _____

