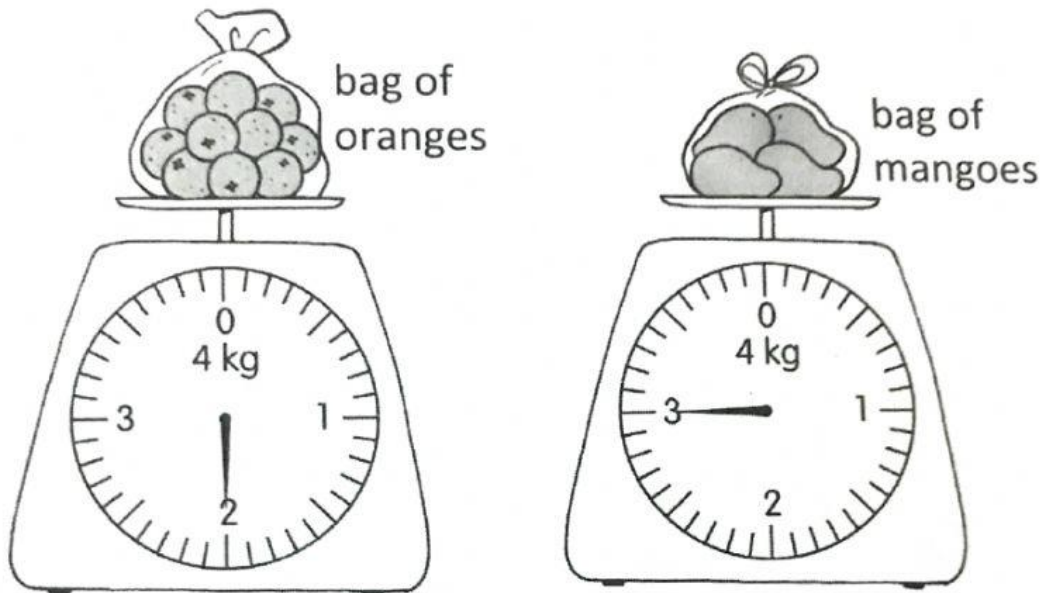


## Practice 5 Comparing Masses in Kilograms

1.



(a) The mass of the bag of oranges is 2 kg.

(b) The mass of the bag of mangoes is 3 kg.

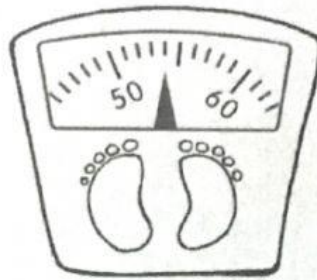
(c) Which bag is lighter? bag of oranges

(d) Which bag is heavier? bag of mangoes

How much heavier? 1 kg

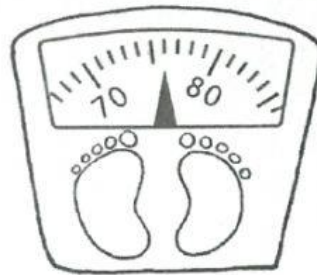
3. Fill in the blanks.

(a)



Nurul has a mass of 54 kg.

(b)



Hasri has a mass of 76 kg.

(c) Who is heavier, Nurul or Hasri? Hasri

How much heavier? 22 kg

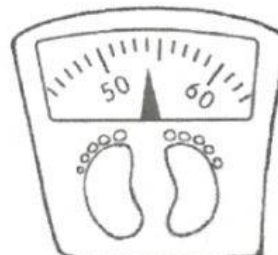


Hasri

?

?

?



Nurul