

Practice 4 Measuring Mass in Kilograms


1. Fill in the blanks.

more than
parcel

less than
cake


as heavy as
pear

(a)



The cake is as heavy as 1 kg.

(b)



The mass of the pear is less than 1 kg.

(c)



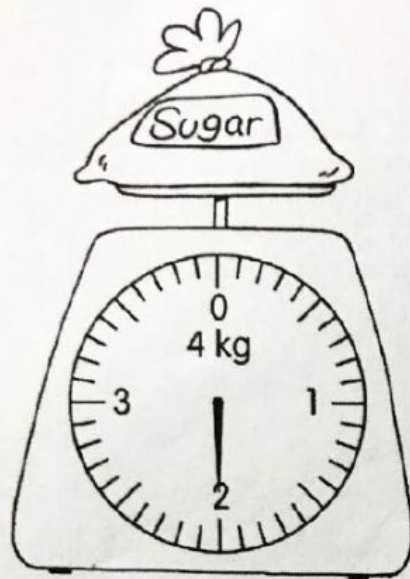
The mass of the parcel is more than 1 kg.

(d) The pear is the lightest.

(e) The parcel is the heaviest.

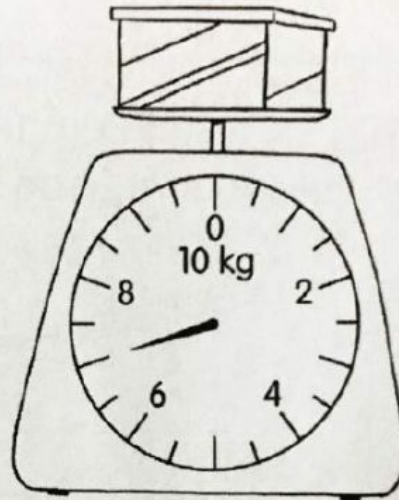
2. Read the scales and fill in the blanks.

(a)



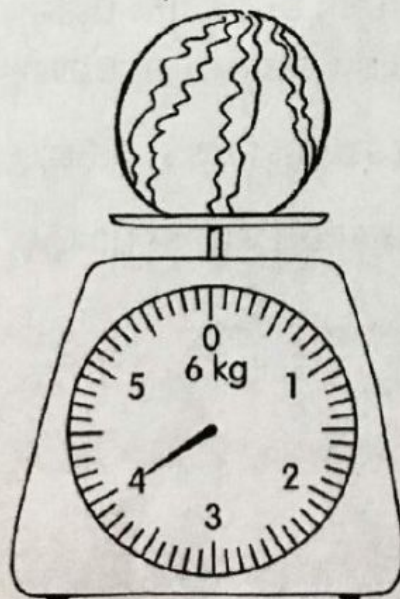
2 kg

(b)



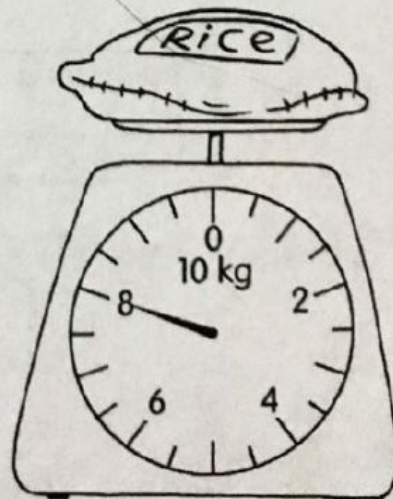
7 kg

(c)



4 kg

(d)



8 kg