

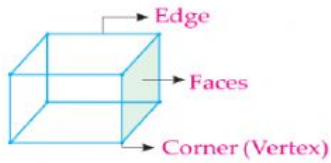
Sun Rise English School

Subject: Mathematics

Class: _____

Name: _____ Date: _____

Write the name of each shape. Also, find the number of faces, edges and vertices.

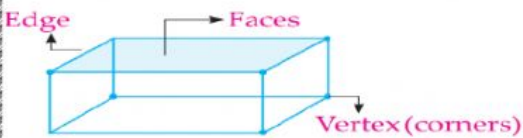


Faces

Edges

Vertices

Name: _____

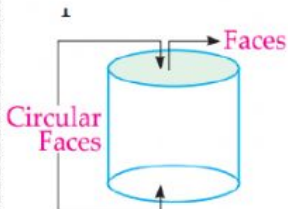


Faces

Edges

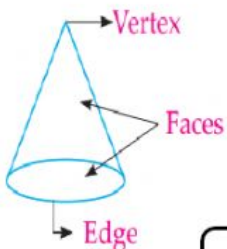
Vertices

Name: _____



Faces

Name: _____



Faces

Edge

vertex

Name: _____