



Sarasas Witaed Suksa School

Subject: Mathematics Kg. 3/\_\_\_\_

A. Count and choose the number in each box and subtract.

1.



-



=

2.




-



=

3.



-



=

4.




-




=

5.



-



=

