


## Practice 2 Addition and Subtraction of Money


1. How much money is there in the bags altogether?  
Write the addition sentence in each case.

(a)



\$ 0.35

+




\$ 0.20

=


\$ \_\_\_\_\_

(b)



\$ 30.40

+



\$ 50.10

=


\$ \_\_\_\_\_

(c)



\$ 40.55

+



\$ 12.20

=

\$ \_\_\_\_\_

2. How much money is left?  
Write the subtraction sentence in each case.

(a)



\$ 30.50

-



\$ 15.20

=

\$ \_\_\_\_\_

(b)



\$ 50.20

-



\$ 30.10

=

\$ \_\_\_\_\_

(c)



\$ 0.80

-



\$ 0.60

=

\$ \_\_\_\_\_