






Mathematics Year 1: Addition and subtraction stories.

Name: _____

Class: _____

A. Fill in the blanks.

1.		There are _____ red cars. There are _____ yellow cars. There are 8 toy cars altogether.
2.		There are 8 flowered hair clips and _____ ribboned hair clips. The total number of hair clips is _____.
3.		Mila has 9 purple stickers. Mei Li has _____ red stickers. Their total number of sticker is _____.
4.		There are 10 eggs. _____ eggs are broken. _____ eggs are not broken.
5.		Safi has 12 pet fishes. _____ are goldfish. The balance are _____ guppy fish.

B. Match.

1.	Maria makes 15 purple flowers and 20 yellow flowers. The difference in numbers between purple flowers and yellow flowers is 5.
2.	Sara saves RM45. Her mother gives another RM50. The total amount of Sarah's money is RM95.
3.	Ravi reads 30 comics. Zul reads 34 comics more than Ravi. Zul reads 64 comics altogether.
4.	Selvi has 37 beads. She gives 16 beads to Azi. Selvi has 21 beads left.
5.	Sani's mother sells 58 buns on Sunday. On Monday she sells 13 buns less. So, on Monday, she sells 45 buns.

$$30 - 34 = 64$$

$$45 - 50 = 95$$

$$20 - 15 = 5$$

$$58 - 13 = 45$$

$$37 - 16 = 21$$