

Mathematics – Grade1

Shapes




Exercise 1. Listen and repeat

Click on the speaker to listen and then click on the microphone to repeat.



Circle



Square



Rectangle



Triangle

Exercise 2: Look and Match

Triangle





Reactangle

Circle

Square

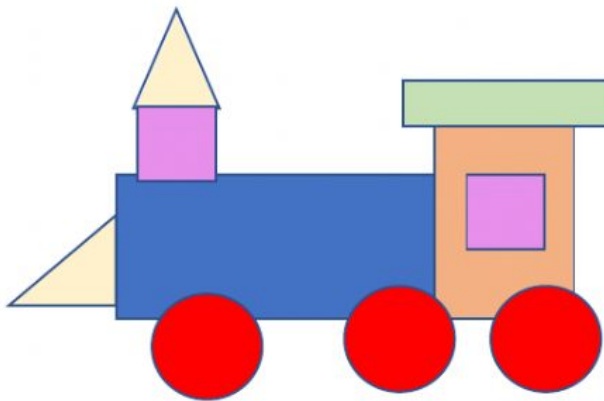


Exercise 3: Drag and drop the objects.


Rectangle	Triangle	Circle	Square
			



Exercise 4: Look at the picture and count



1. How many **triangles**  are there? Answer

2. How many **circles**  are there? Answer

3. How many **squares**  are there? Answer