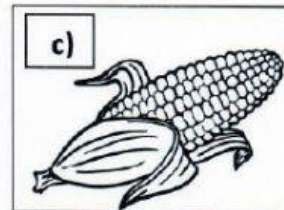
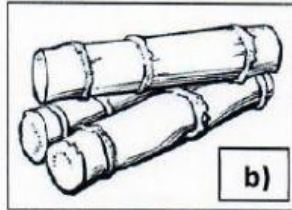



Geography

Question 1: Analysing pictures

(Look at the following pictures and answer the questions that follow)



1.1) Name the plants shown in pictures A, B and C. (1)

A

B

C

1.2) Which products can be made from the plants in pictures B and C. (2)

B

C

1.3) What type of climate is required to farm with picture A? (1)

A

1.4) Provide one example of a cereal crop. (1)

Question 2: Use one word for

(Provide one word for each of the following definitions. Write only the letter and the word)

- 2.1) An animal that provides meat, leather and milk.
- 2.2) Farms that produce products such as cheese, milk, yogurt.
- 2.3) An area of fresh water usually made when people build a wall across a river.
- 2.4) Birds such as chickens and ostriches.
- 3.5) A place where water is stored once it has been cleaned.

(5)


Question 3: Fill in the missing information

| Type of fruit: | Where does it grow? | Examples: |
|----------------|------------------------------|------------------------------|
| Tropical | a) | Mangoes, Bananas, Pineapples |
| b) | Cold Winters and dry summers | c) |
| Citrus | d) | e) |

(5)

Question 4: Comparing pictures

(Look at the following pictures and answer the questions that follow)



4.1) Name two ways in which this fruit has been processed.

(1)

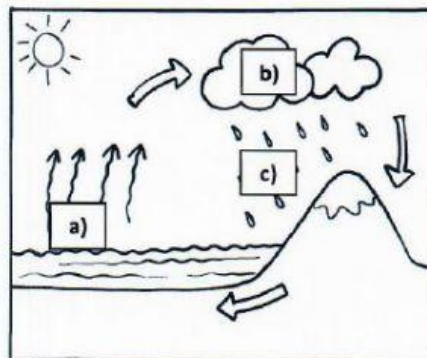
4.2) Which other method could we have used to process an orange?

(1)

4.3) Provide one reason why we process our food.

(1)

Question 5: Analysing a diagram



5.1) Use the picture to provide one example of:

Salt water:

Fresh water:

(1)

5.2) Make use of the letters A, B and C to explain how salt water is changed into fresh water.

(3)

5.3) List two examples of how people get underground water.

(1)

5.4) Briefly explain how water is used in factories and mining.

(2)