



Santa Rosa de Lima Primary School
SCIENCE SHORT TEST NO.4
II Trimester 2021

Sixth Grade
Teacher Xinia Acuña Solís
Time: 35 minutes

Obtained points: _____
Total points: 16 pts
Score: _____

General Instructions:

1. Read the whole test carefully before you start.
2. Check your test before handing it in.

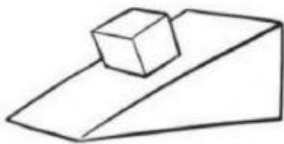
Name: _____

Date: _____

I Part. Identification. Value 6 points. (1 point each one).


Instructions: Label each Simple Machine.

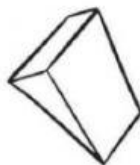
lever - wheel and axle – screw – pulley – wedge – inclined plane














II Part. Match. Value 10 points. (1 point each one).

Instructions: Match the meanings in Column A with the correct words in Column B.

Column A		Column B
It is a push or pull that acts on an object.	()	1. Gravity
A force that requires two pieces of matter to touch.	()	2. Simple machine
A force that acts as a distance.	()	3. Input force
It is when two forces with same magnitude act in opposite direction.	()	4. Output force
It is the force that results when two materials rub against each other.	()	5. Force
A type of friction that is present when particles of air contact a surface.	()	6. Contact force
The force of attraction between two objects.	()	7. Noncontact force
The force that the machine supplies.	()	8. Friction
The force that you use.	()	9. Air resistance
It is a machine made up of one or two parts.	()	10. Balanced forces