 ICM INSAN CENDEKIA MADANI	Assessment Unit 3 2D and 3D Shapes	Name :	
		Class :	
		Teacher :	
		Date :	
✓ Individual guided practice ✓ Independent/ fluency practice		Marks: 19	Score:




Read the instruction below and answer all questions!

3 2D Shapes and 3D Shapes

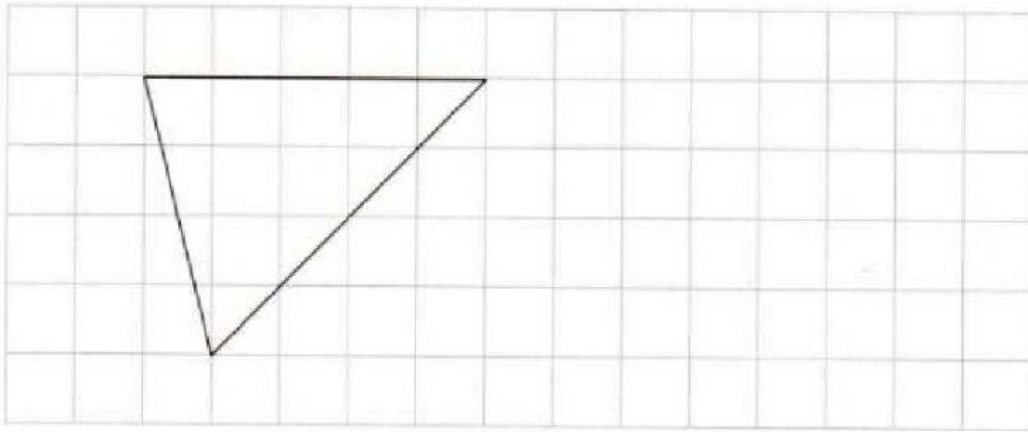
Worksheet 1

Sides, Vertices and Right Angles

1 Match and fill in the blanks.

- (a)  • • I have 3 vertices and no right angles.
I am a/an _____.
- (b)  • • I have 8 sides and 8 vertices.
I am a/an _____.
- (c)  • • I have 4 sides and 4 right angles.
I am a/an _____.

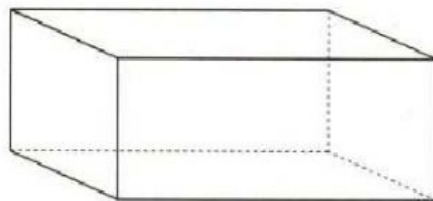
Draw the line to make a shape.



Faces, Edges and Vertices

For each 3D shape, name the shape and state the number of faces, edges and vertices.

(a)

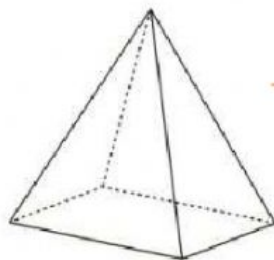


_____ faces

_____ edges

_____ vertices

(b)



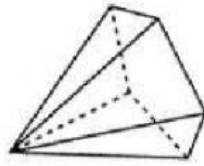
_____ faces

_____ edges

_____ vertices

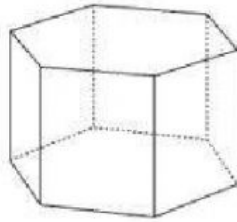
Give a tick to the correct name of each shape.

(a)



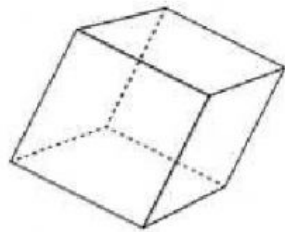
pyramid / prism

(b)



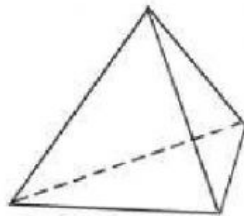
pyramid / prism

(c)



pyramid / prism

(d)



pyramid / prism