



Name: _____

Date: _____

Practice: Understand division

A. Vocabulary

share: chia

equal group: nhóm bằng nhau

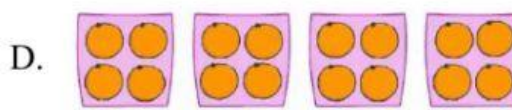
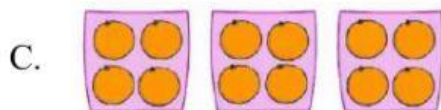
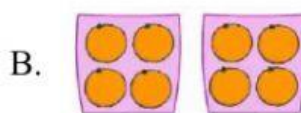
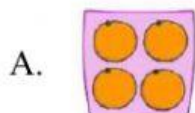
division: phép chia

each: mỗi

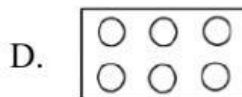
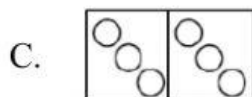
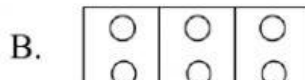
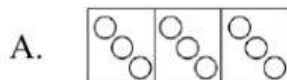
B. Practice

Choose the correct answer.

1. Share 16 oranges equally into 4 dishes.



2. Share 9 counters equally into 3 dishes.

*Write the division for each problem.*

Problem	Division
3. Lily shares 8 pumkins into 2 equal baskets.	$\underline{8} \div \underline{2}$
4. John shares 18 tomatoes into 9 equal baskets.	$\underline{\quad} \div \underline{\quad}$
5. Linda shares counters into equal group as the picture below. 	$\underline{\quad} \div \underline{\quad}$

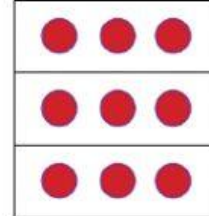


6. Choose the model for each division.

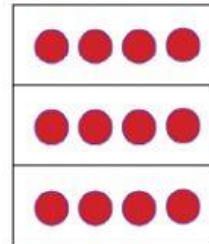
Division

Model


$$12 \div 4$$



$$9 \div 3$$



$$12 \div 3$$



7. Peter shares 10 counters into 2 equal groups as the model below.



Is he correct? Explain.

Correct

Not correct

Explain: _____
