











Name : \_\_\_\_\_ Grade : \_\_\_\_\_

Topic: Unit 3 Multiplication (Array)

Multiply

How many circles/blocks are there? How can we find it? Write the number sentence to the correct place.

	
Drag and drop the answer here	Drag and drop the answer here
	
Drag and drop the answer here	Drag and drop the answer here
	
Drag and drop the answer here	Drag and drop the answer here
	
Drag and drop the answer here	Drag and drop the answer here
	
Drag and drop the answer here	Drag and drop the answer here

$3 \times 3$

$2 \times 5$

$4 + 4 + 4$

$4 \times 5$

$1 \times 3$

$2 \times 3$

$2 + 2 + 2 + 2$

$5 \times 3$

$1 \times 5$

$2 \times 2$