

STATE OF MATTER

Quarter 1 – Week 1 – Lesson 1
Grade 3 – Diamond

Name: _____

States of Matter

Directions: Cut and paste the word into the correct column.

| Solid | Liquid | Gas |
|-------|--------|-----|
| | | |


| | | | | |
|---|--|---|---|---|
|  WIND |  RIVER |  WOOD |  SMOKE |  JUICE |
|  TABLE |  STEAM |  RAIN |  BOOK |  HELIUM |
|  SODA |  SHOE |  AIR |  SOAP |  APPLE |



Gases, Liquids and Solids

Look at the diagrams below. Write in each box whether the labelled part is a gas, liquid or a solid.


water vapour



kettle


water

cloud



hot air

bubbles



lemonade

glass