

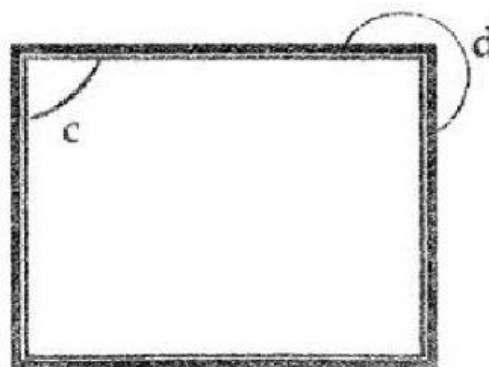
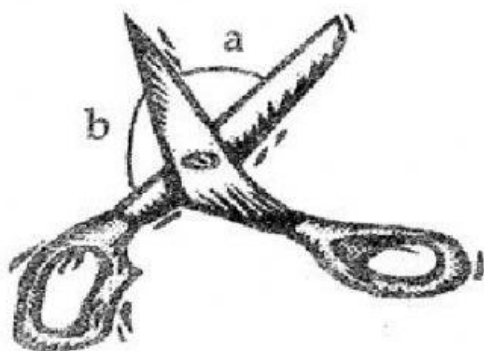
Name: \_\_\_\_\_ Date: \_\_\_\_\_

Mathematics

Angles BJC question

For each of the angles marked in the pictures below, write down the name of the angle.

obtuse angle, right angle, acute angle, reflex angle



Answer a \_\_\_\_\_ [1]

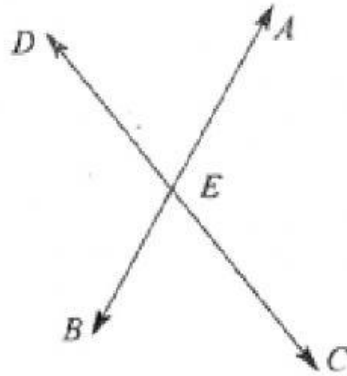
Answer b \_\_\_\_\_ [1]

Answer c \_\_\_\_\_ [1]

Answer d \_\_\_\_\_ [1]

From the list below, choose the word that best describes each angle listed.

Acute angle	Right angle
Obtuse angle	Straight angle



(a) (i)  $\widehat{AED}$ ,

Answer: \_\_\_\_\_ [1]

(ii)  $\widehat{DEC}$ ,

Answer: \_\_\_\_\_ [1]

(iii)  $\widehat{AEC}$ .

Answer: \_\_\_\_\_ [1]

(b) Which letter names the vertex of these angles?

Answer: \_\_\_\_\_ [1]

(c) Which angle is vertically opposite to  $\widehat{BEC}$ ?

Answer: \_\_\_\_\_ [1]