





PARTS OF A PLANT

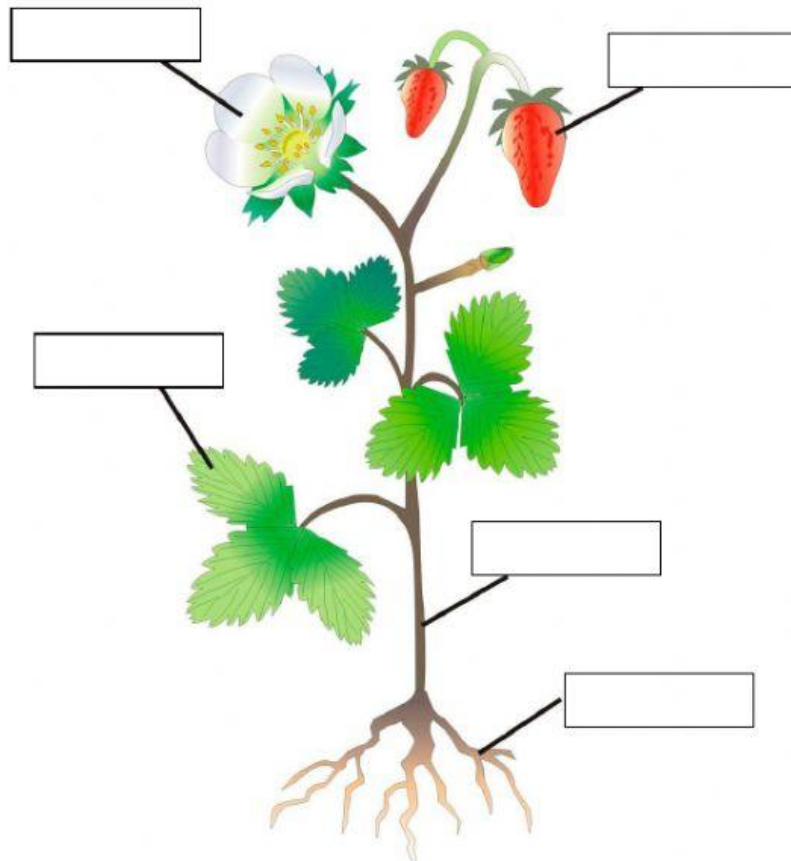
Find different parts of a plant



F	D	F	R	U	I	T
M	L	V	B	S	S	P
A	E	O	I	S	T	P
W	A	B	W	T	O	Z
K	F	O	A	E	O	E
O	Q	A	D	M	R	F
S	C	Z	A	D	N	M



















Write their names in the picture



TYPES OF PLANTS

Fill in the gaps

Evergreen trees 	Deciduous trees 	Wild plants 	Cultivated plants 
Tree 	Flower 	Grass 	Bush 
			
			



Write true (T) or false (F)

- Roots absorb water and minerals from the soil
- Plants need water, air, sunlight and soil
- The stem grows under the ground
- Leaves are usually green
- Fruits transport water and minerals
- Evergreen trees lose their leaves in autumn

WHICH PART OF THE PLANT DO WE EAT?

*Write roots, stem, leaves, flower or fruit*

A central photograph of a variety of fresh produce, including carrots, broccoli, bell peppers, tomatoes, eggplants, and leafy greens. Red arrows point from specific items to empty rectangular boxes for labeling. The boxes are arranged as follows: three boxes at the top (left, middle, right), one box in the middle-right, one box at the top-right, one box at the bottom-left, one box at the bottom-middle-left, one box at the bottom-middle-right, one box at the bottom-right, and one box at the bottom-far-right.