



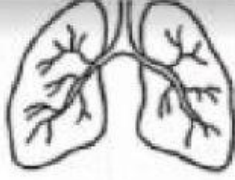



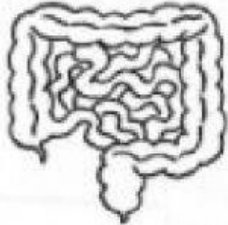
Name:

()

Class:

Date:

1. Match

1. Digestive system		Carries digested food, oxygen and water to all body parts
2. Circulatory system		Allows body parts to move
3. Respiratory system		Allows the body to take in air
4. Skeletal system		Protects important body organs
5. Muscular system		Breaks down food into simpler substances



1. Which two statements about a system are true?
- A It is made up of many similar parts.
 - B It is made up of many different parts.
 - C Its parts work together to perform the same function.
 - D Its parts work separately to perform the same function.

(1) A and C

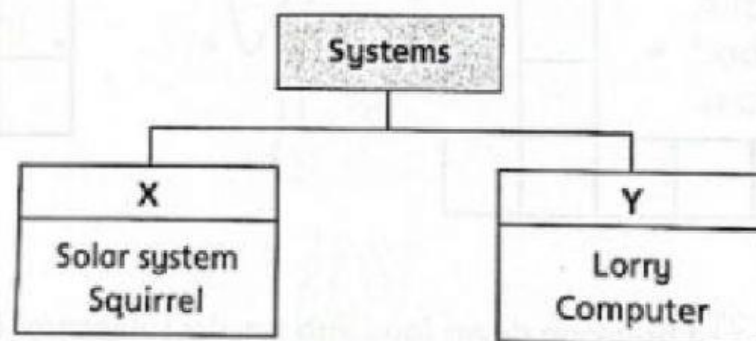
(2) A and D

(3) B and C

(4) B and D

()

2. Study the classification chart below.



Which of the following can be placed into group X?

(1)



Watch

(2)



Fan

(3)



Fern

(4)



Calculator

()



5. Which organ system is correctly named?

(1)



Digestive system

(2)



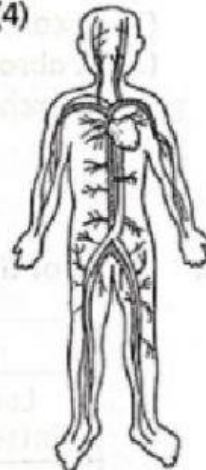
Respiratory system

(3)



Skeletal system

(4)



Circulatory system

()

6. Which human organ system breaks down food to allow absorption into the human body?

(1) Skeletal system

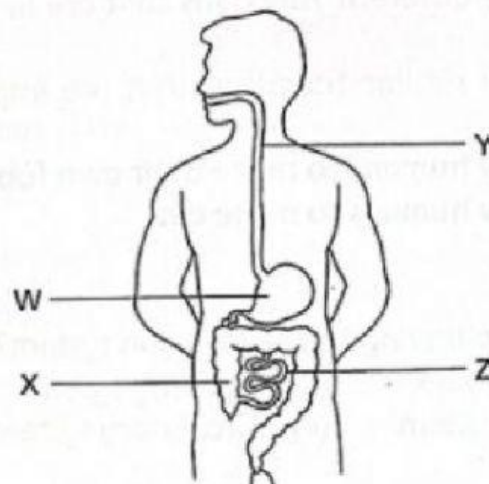
(2) Digestive system

(3) Circulatory system

(4) Respiratory system

()

Study the following organ system and answer questions 7 and 8.



7. Which statement about the system above is **not** correct?

(1) It breaks down food into simpler substances.

(2) It consists of the stomach and large intestine.

(3) It absorbs digested food into the bloodstream.

(4) It exchanges substances with the surroundings.

()



8. Which of the following names parts W, X, Y and Z correctly?

	W	X	Y	Z
(1)	Large intestine	Gullet	Small intestine	Stomach
(2)	Large intestine	Small intestine	Stomach	Gullet
(3)	Stomach	Large intestine	Gullet	Small intestine
(4)	Stomach	Small intestine	Gullet	Large intestine

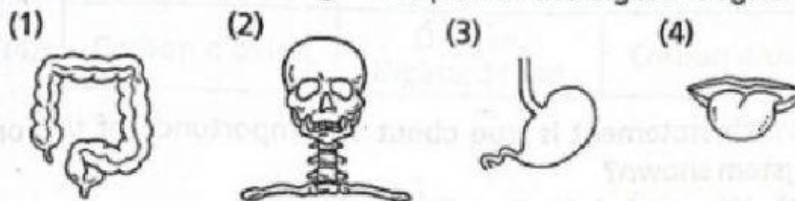
()

9. Which of the following lists the organs of the digestive system only?

- (1) Stomach, heart, skull
- (2) Lung, intestine, heart
- (3) Gullet, stomach, intestine
- (4) Backbone, stomach, gullet

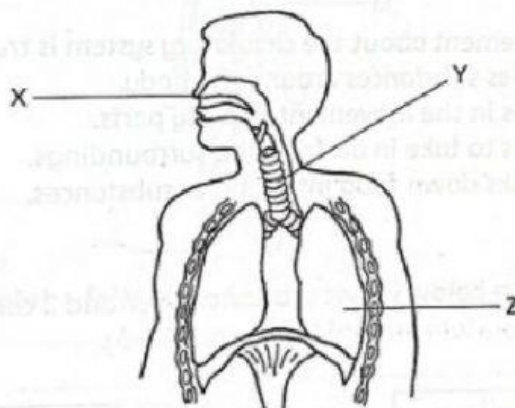
()

10. Which of the following is not part of the digestive system?



()

Study the following organ system and answer questions 11 to 13.



11. What organ system does the diagram show?

- (1) Muscular system
- (2) Digestive system
- (3) Circulatory system
- (4) Respiratory system

()



12. Which of the following names parts X, Y and Z correctly?

	X	Y	Z
(1)	Windpipe	Nose	Lung
(2)	Lung	Windpipe	Nose
(3)	Nose	Lung	Windpipe
(4)	Nose	Windpipe	Lung

()

13. Which statement is true about the importance of the organ system shown?

- (1) We need air to stay alive.
- (2) We need food to stay alive.
- (3) We need water to stay alive.
- (4) We reproduce for our species to continue to exist. ()

14. Which statement about the circulatory system is true?

- (1) It carries substances around the body.
- (2) It helps in the movement of body parts.
- (3) It helps to take in air from the surroundings.
- (4) It breaks down food into simpler substances. ()