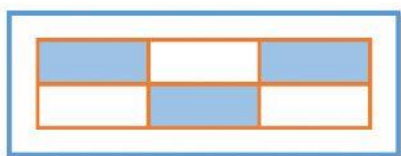



Fracciones propias e impropias

Observa cada gráfica, escribe la fracción correspondiente, selecciona si es propia o impropia y escribe como se lee.

 $\frac{\square}{\square}$

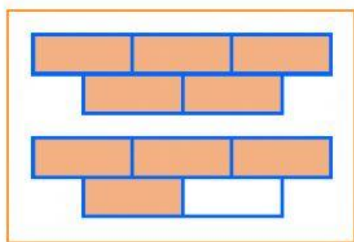
Propia

Impropia

 $\frac{\square}{\square}$


Propia

Impropia

 $\frac{\square}{\square}$



Propia

Impropia

 $\frac{\square}{\square}$

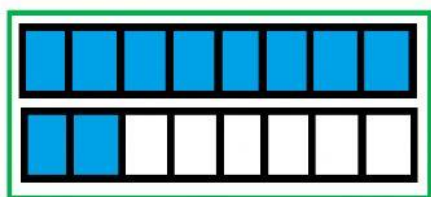
Propia

Impropia

 $\frac{\square}{\square}$

Propia

Impropia

 $\frac{\square}{\square}$

Propia

Impropia