





Ancient Egypt
Class IV, History

Name: _____ Sec: _____ Date: _____

Q1. Identify the given pictures by the description and write their name. For your help word box is given:

Scribe	Sphinx	mummy	Pyramids
--------	--------	-------	----------

	Picture	Name
<u>A</u>		It is a mythical creature with the head of a human and the body of a lion. _____
<u>B</u>		These structures were built as the symbol of afterlife and to preserve the dead bodies and treasures. _____
<u>C</u>		Dead bodies were preserved for afterlife, they are called as _____

<u>D</u>		<p>They read and wrote official documents in Ancient Egypt.</p> <p>_____</p>
----------	---	--

Q2. Which river flows through Egypt?

Q3. Which city is the capital of Egypt?

Q4. How long is River Nile?

Q5. Which Sea is located in the East of Egypt?

Q6. What is the name of the plant which was used to make paper in Ancient Egypt?

Word box:

Cairo
Nile
4100 miles
Red
Papyrus