





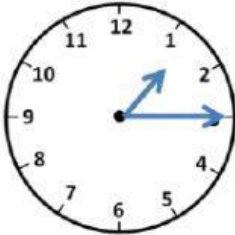













English Year 3 | Module 7 | Telling Time

Choose the correct time	
1. 	2. 
<div>twelve o'clock</div> <div>two o'clock</div>	<div>a quarter past six</div> <div>a quarter to six</div>
3. 	4. 
<div>five o'clock</div> <div>four o'clock</div>	<div>a quarter to two</div> <div>a quarter to one</div>
5. 	6. 
<div>a quarter past eight</div> <div>a quarter to eight</div>	<div>a quarter to ten</div> <div>a quarter past ten</div>
6. 	8. 
<div>a quarter past one</div> <div>a quarter to one</div>	<div>a quarter to three</div> <div>a quarter to four</div>

Tell the time and the places.

	What's the time?	Where are you?
1	 <input type="text"/>	 <input type="text"/>
2	 <input type="text"/>	 <input type="text"/>
3	 <input type="text"/>	 <input type="text"/>
4	 <input type="text"/>	 <input type="text"/>
5	 <input type="text"/>	 <input type="text"/>