

Worksheet 5.5b

Magnetic or non-magnetic?








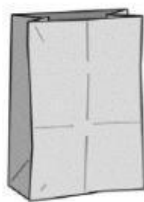
Name: _____

Date: _____

Zoe has drawn the objects in different groups but she has got some wrong.

Mark them with a tick (✓) if they are correct and with a (✗) if they are wrong.

The first one has been done for you.

| Magnetic | Non-magnetic |
|--|---|
| <p>metal spoon</p>  | <p>metal paper clip</p>  |
| <p>plastic ruler</p>  | <p>reading book</p>  |
| <p>glass</p>  | <p>pencil</p>  |
| <p>keys</p>  | <p>paper bag</p>  |