

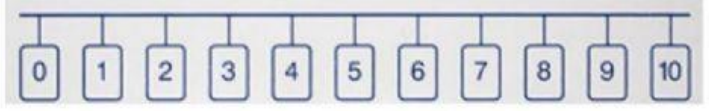
Inequalities

Instruction: For each inequality shown, select the values for x from the number line that matches that inequality.

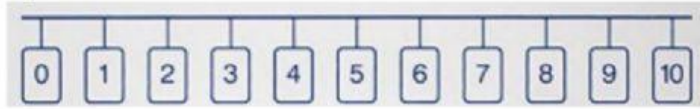
1) $x < 9$



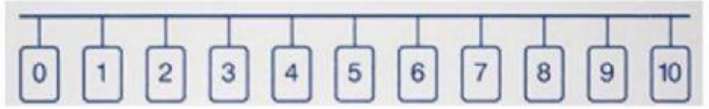
2) $x > 5$



3) $x \geq 10$



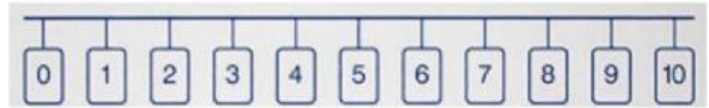
4) $x \leq 3$



5) $1 \leq x < 5$



6) $4 < 2x \leq 6$



Click [Finish](#) and then [Check my Answers](#) to review your answers