

DARBARI LALI DAV MODEL SCHOOL, PITAMPURA

MATHS BEE - AUGUST

CLASS - 2

DATE - 23/08/2021

Q1. Add the following sums.

T O

$$\begin{array}{r} \text{A)} \quad 4 \quad 8 \\ + \quad 3 \quad 2 \\ \hline \\ \hline \end{array}$$

T O

$$\begin{array}{r} \text{B)} \quad 3 \quad 0 \\ + \quad 6 \quad 6 \\ \hline \\ \hline \end{array}$$

H T O

$$\begin{array}{r} \text{C)} \quad 3 \quad 5 \quad 9 \\ + \quad 1 \quad 6 \quad 9 \\ \hline \\ \hline \end{array}$$

H T O

$$\begin{array}{r} \text{D)} \quad 4 \quad 2 \quad 8 \\ + \quad 2 \quad 9 \quad 7 \\ \hline \\ \hline \end{array}$$

**Q2. Choose the correct option.**

A)  $100 + 90 = 190$       109      910

B)  $50 + 50 =$       500      100      150

c)  $30 + 20 =$       60      40      50

D)  $500 + 0 = 0 \quad 500 \quad 050$

**Q3. Match the numbers with their sums.**

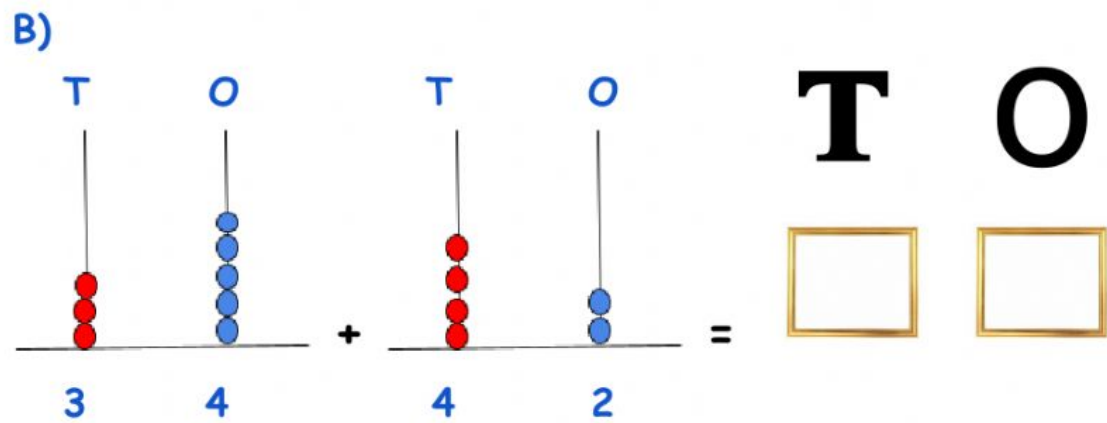
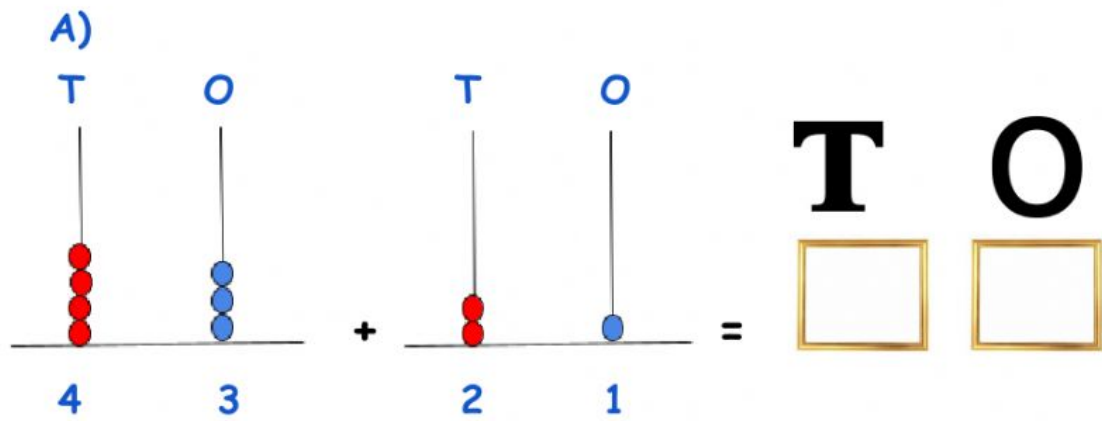
1)  $25 + 25$  21

2)  $100 + 100$  20

3)  $13 + 7$  200

4)  $15 + 6$  50

Q4. Solve the abacus and write the answer.



Q.5 Riya has 9



dolls . Her mother

gave her 9 more



dolls.

How many dolls does Riya have now ?



Q6. An ice-cream shop sells 85



on

Monday and 45



on Tuesday.

How many ice-creams  
did the shop sell  
in two days ?



Q7. Lion eats 37 rabbits in the month of June and 41 rabbits in the month of July. How many rabbits did the lion eat in two months ?

T O

Number of rabbits in June = \_\_\_\_\_  
Number of rabbits in July = + \_\_\_\_\_  
Total number of rabbits = \_\_\_\_\_

Ans. Lion eats \_\_\_\_\_ rabbits .

Q8. There are 518 green gems and 326 red gems in a bag. How many gems are there in all ?

H T O

Number of green gems = \_\_\_\_\_  
Number of red gems = + \_\_\_\_\_  
Total number of gems = \_\_\_\_\_


Ans. There are \_\_\_\_\_ gems in the bag.

Q9. Add the following .

A)



B)



C)

