

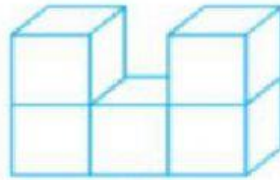
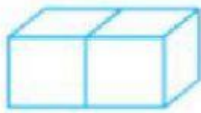


Conteo de Cubos



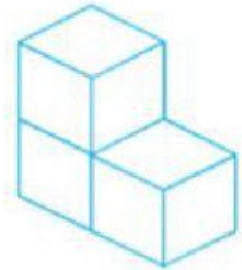
1

Relaciona mediante líneas cada figura con su respectiva vista desde arriba.

a.





b.



2

Relaciona mediante líneas cada figura con su respectiva vista desde arriba.

a.



b.

