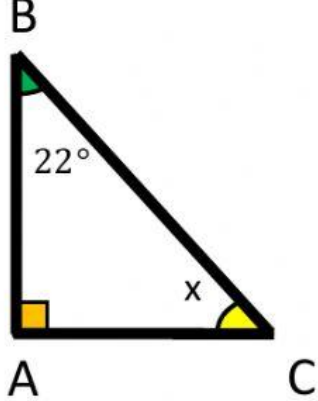


Name \_\_\_\_\_

Date \_\_\_\_\_

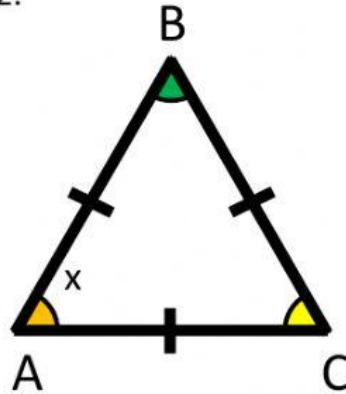
Year Group \_\_\_\_\_

1. Find the missing angle



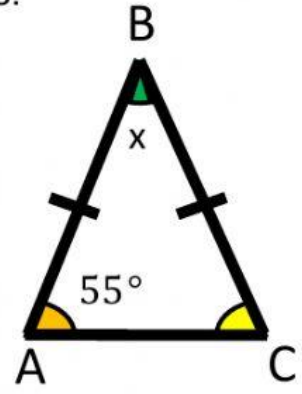
Answer:  $x = \underline{\hspace{1cm}}^\circ$

2.



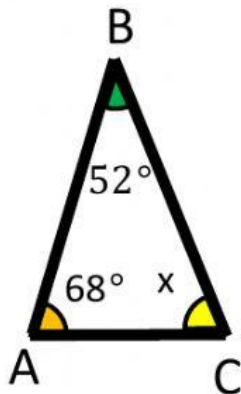
Answer:  $x = \underline{\hspace{1cm}}^\circ$

3.



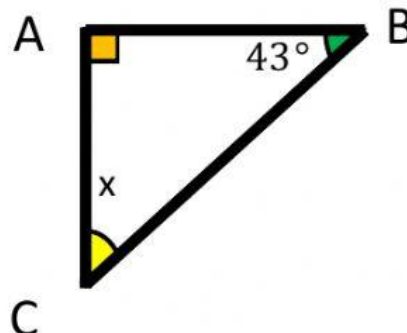
Answer:  $x = \underline{\hspace{1cm}}^\circ$

4.



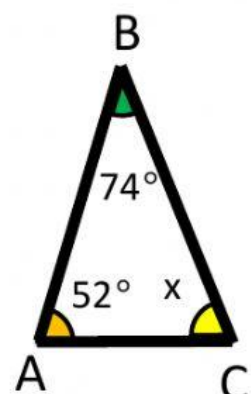
Answer:  $x = \underline{\hspace{1cm}}^\circ$

5.



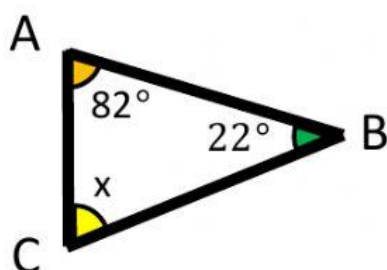
Answer:  $x = \underline{\hspace{1cm}}^\circ$

6.



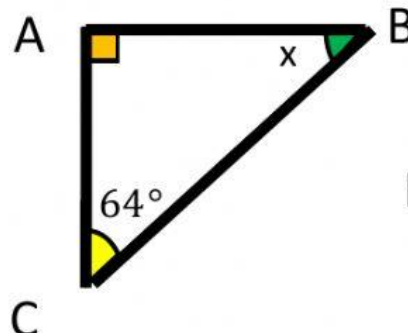
Answer:  $x = \underline{\hspace{1cm}}^\circ$

7.



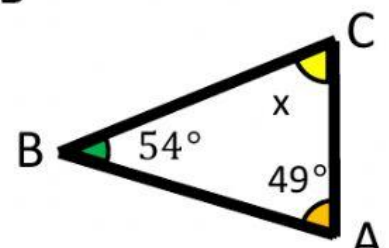
Answer:  $x = \underline{\hspace{1cm}}^\circ$

8.



Answer:  $x = \underline{\hspace{1cm}}^\circ$

9.



Answer:  $x = \underline{\hspace{1cm}}^\circ$