

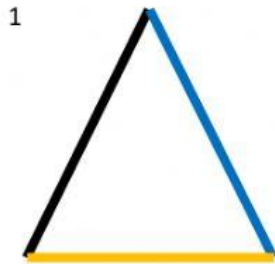
Name _____

Date _____

Year Group _____

Classify the triangles as acute, right, or obtuse

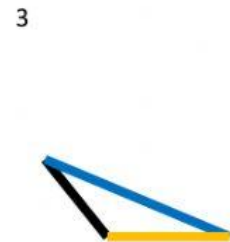
Write the letter **A** for Acute Triangle, **R** for Right Triangle, or **O** for Obtuse Triangle



Answer _____



Answer _____



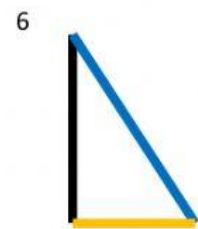
Answer _____



Answer _____




Answer _____



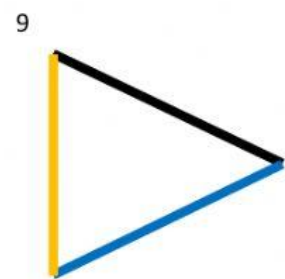
Answer _____



Answer _____



Answer _____



Answer _____