



Fill in the missing spaces with the words from the liquid below:



Solids, Liquids and Gases



All materials are either solid, _____ or gas.

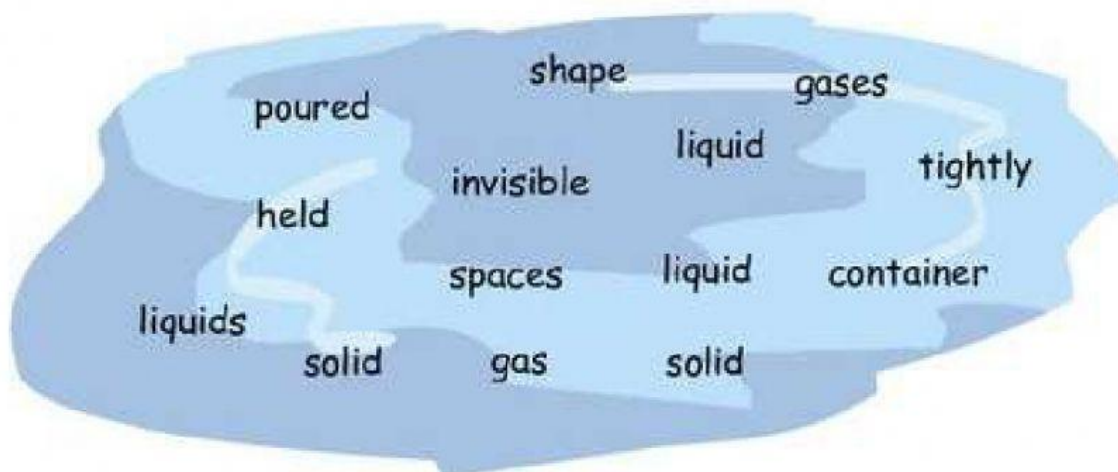
A brick, chocolate and glass are all _____.

Solids can be _____. They have a definite _____.







The molecules that make up a solid are packed _____ together.

Water, milk and syrup are all _____. Liquids can be _____ and take the shape of the _____ they are in.

Steam, helium and carbon dioxide are all _____. Gases are mostly _____. They will fill empty _____. Steam is a _____, water is a _____ and ice is a _____.



Q2. Identify how these plant reproduce(leaf, stem, root, seed):-

<p>A. Bryophyllum</p> 	<p>B. Potato</p> 	<p>C. Rose</p> 
<p>D. Spinach</p> 	<p>E. Sugarcane</p> 	<p>F. Mango</p> 

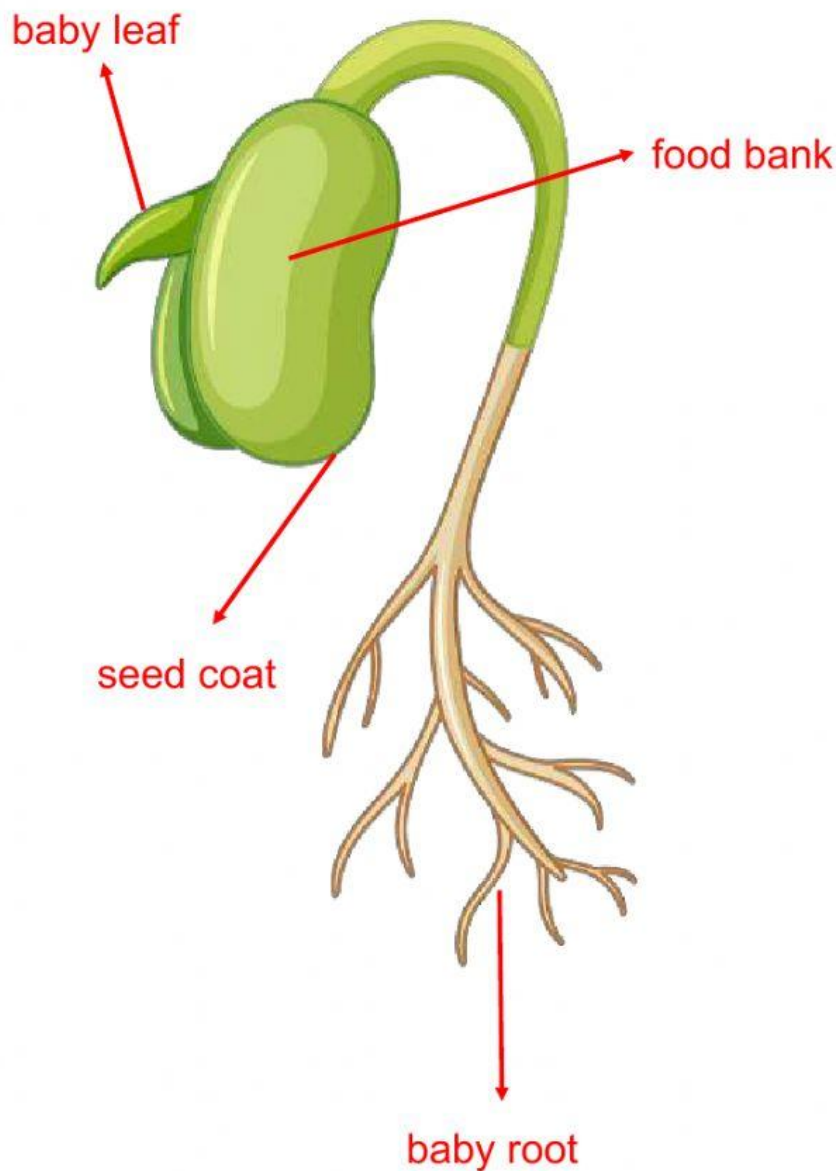
Q3. Label the parts of this bean seed.

baby root

baby leaf

food bank

seed coat



Fill in the blanks choosing a correct answer from the box below:

flowers, baby, air, wings, embryo

1. A germinating seed needs air to breathe.
2. The seed coat protects the baby part.
3. Many flowers grow into fruits.
4. A seedling is also called embryo.

