

Relaciones y Funciones

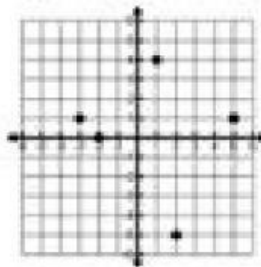
Indica si las siguientes son o no funciones

1.

$\{(2, 5), (-1, 6), (5, 7), (8, 5), (2, 4)\}$

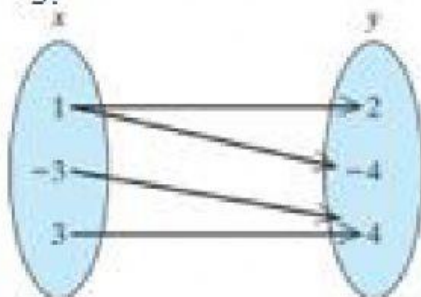
Función

2.



Función

3.



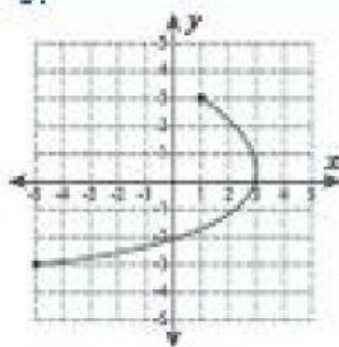
Función

4.

x	y
-2	3
-1	3
0	3
1	3

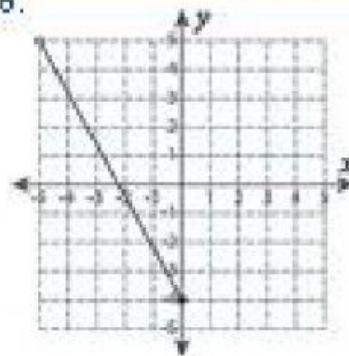
Función

5.



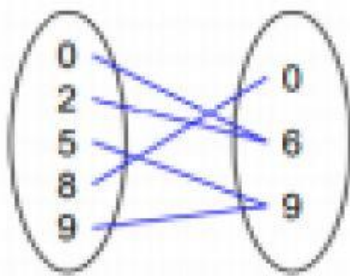
Función

6.



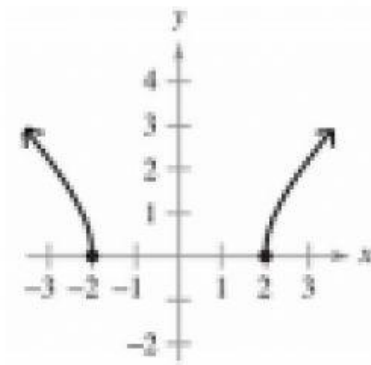
Función

7.



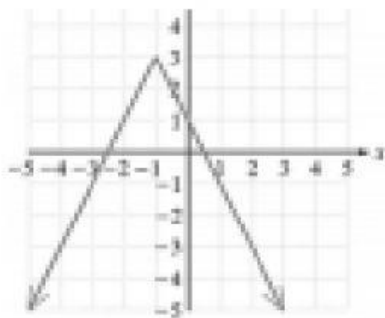
Función:

8.



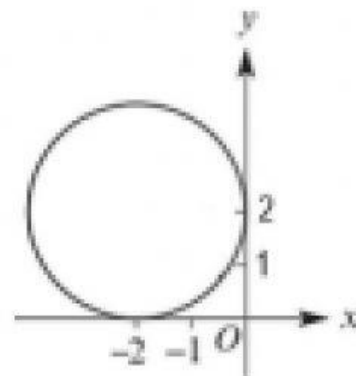
Función:

9.



Función:

10.



Función: