


Name: _____ Batch: _____


DIVISION OF INTEGERS

Drag the correct answer in the yellow box.


1 $200 \div 10 = \underline{\hspace{2cm}}$




4 $-50 \div 5 = \underline{\hspace{2cm}}$




2 $-30 \div -5 = \underline{\hspace{2cm}}$




5 $-36 \div (-36) = \underline{\hspace{2cm}}$



3 $72 \div -8 = \underline{\hspace{2cm}}$



6 $0 \div 8 = \underline{\hspace{2cm}}$



0

-10

-9

25

20

8

6

1

2

-1